



Name: _____

Date: _____

Can you work out these calculations?

Use your fingers. Do a repeated addition. Do a repeated subtraction. Draw pictures. Do a running total.

$3+28$	$6+49=$	$67+4=$	$1/4$ of 16
$20+34=$	$50-4=$	$30\div 10=$	$1/2$ of 80
$40+46=$	$50+50+10=$	$12\div 2=$	$1/3$ of 9
$5\div 5=$	$7\times 2=$	$6\times 5=$	$2/4$ of 8
$66-20=$	$5+58=$	$5\times 0=$	$2/3$ of 12
$9\times 3=$	$60-6=$	$3\times 4=$	$3/4$ of 20
$82-30=$	$8+20+4=$	$14\div 2=$	$1/2$ of 100
$5+14+7=$	$29-8=$	$40\div 5=$	$3/4$ of 4
			See below for an explanation

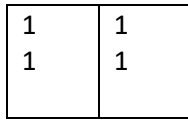
12 divided by 3	Double 15	5 multiplied by 5
6 lots of 5	Half of 20	20 shared by 5
20 shared by 5	Twice 11	The product of 2 and 4

<p>Task 1</p> <p>Some of these calculations are right and some of them are wrong.</p> <p>Put a cross next to the ones that are wrong.</p> <p>$2\times 5=20$</p> <p>$13-4=9$</p> <p>$3+6+6=14$</p> <p>$12\div 2=7$</p> <p>$15-0=15$</p> <p>$8\div 2=4$</p> <p>$2\times 2=4$</p>	<p>Task 2</p> <p>Draw your own number line!!!!</p> <p>$34+24=$</p> <p>$56+35=$</p> <p>$67+24=$</p> <p>$49+33=$</p> <p>$70-24=$</p> <p>$65-42=$</p> <p>$89-42=$</p> <p>$78-36=$</p>	<p>Task 3</p> <p>What's the missing sign?</p> <p>+ - x</p> <p>$4 \underline{\quad} 2 = 8$</p> <p>$4 \underline{\quad} 2 = 6$</p> <p>$4 \underline{\quad} 2 = 2$</p>
---	--	--


Finding halves of numbers.

Draw a shape divided into two equal pieces and share in 1's or tens.

Half of 4 = 2



Half of 40 is 20



Finding thirds of numbers

Draw a shape divided into three equal pieces and share



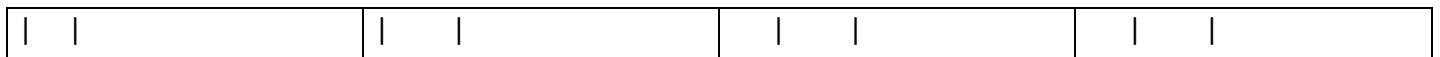
$1/3$ of 6 is 2

$2/3$ of 6 is 4

$3/3$ of 6 is 6

Finding quarters of numbers

Divide a shape into four equal pieces and share



$1/4$ of 8 is 2.

$2/4$ of 8 is 4

$3/4$ of 8 is 6.