

Multiples of 5

Mr Blavoet wants to separate his class into groups of 5. There are 30 children in his class. How many groups would he need?



twinkl.co.uk

Multiples of 2

Miss Fraser has 20 children in her class. She wants enough laptops for children to work in pairs. How many laptops does she need?



twinkl.co.uk

Multiples of 5

A glove has space for five fingers. How many finger spaces are in 10 gloves?



twinkl.co.uk

Multiples of 5

A car seats 5 passengers. How many cars would you need to take 25 people to the shops?



twinkl.co.uk

Multiples of 10




Owen had a birthday party and invited 10 friends. He wants to put two whistles in each party bag. How many whistles does he need?

twinkl.co.uk

Multiples of 2

There are 30 children in 3C. Mrs Roberts has to mark each child's numeracy and science books tonight! How many books does she have to mark?



twinkl.co.uk

Multiples of 10

Chris spends 60p on 10 party bags. How much does each bag cost?



twinkl.co.uk

Multiples of 2

In year 2, there are 40 boys in two classes. How many would be in each year 2 class?




twinkl.co.uk

Multiples of 10

There are 10 sweets in a packet. I have bought 4 packets.


How many sweets do I have?



twinkl.co.uk

Multiples of 2

There are 12 sausages in one packet. How many sausages are in two packets?



twinkl.co.uk

Multiples of 5

Football stickers are sold in packets of five. I want to buy one sticker for each child in the class. If there are 30 children, how many packets do I need to buy?



twinkl.co.uk

Multiples of 2

Miss Casha has 14 pairs of shoes. How many shoes are there altogether?



twinkl.co.uk